



Paro Tuition, 62 Windmill Street,
Gravesend, Kent, DA12 1BJ

For more free resources visit
www.parotuition.com/free-resources-advice



ANALOGIES

Which of the shapes on the right should
replace the question mark?

NON-VERBAL REASONING

Suitable for: Kent Test/GL Assessment Tests

Difficulty: Medium

Timing: 6-7 minutes

Follow us on social media for free content and updates



facebook.com/parotuition



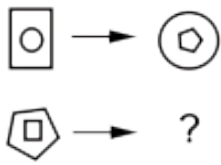
Paro Tuition



@parotuition

Which of the shapes on the right should replace the question mark?

1



A



B



C

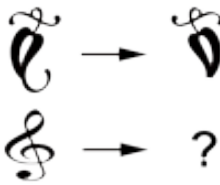


D



E

2



A



B



C

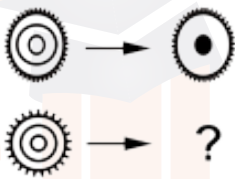


D



E

3



A



B



C

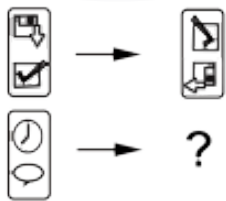


D



E

4



A



B



C

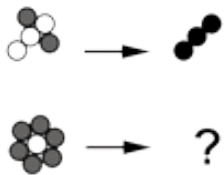


D



E

5



A



B



C

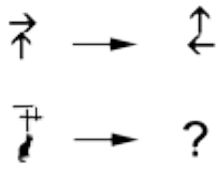


D

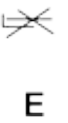
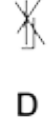
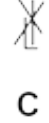

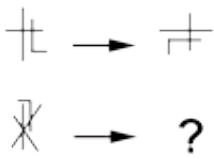


E

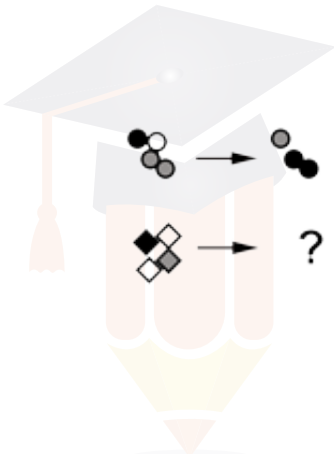
6



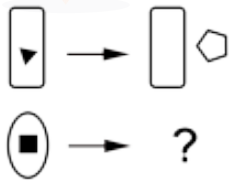
7



8



9



10

